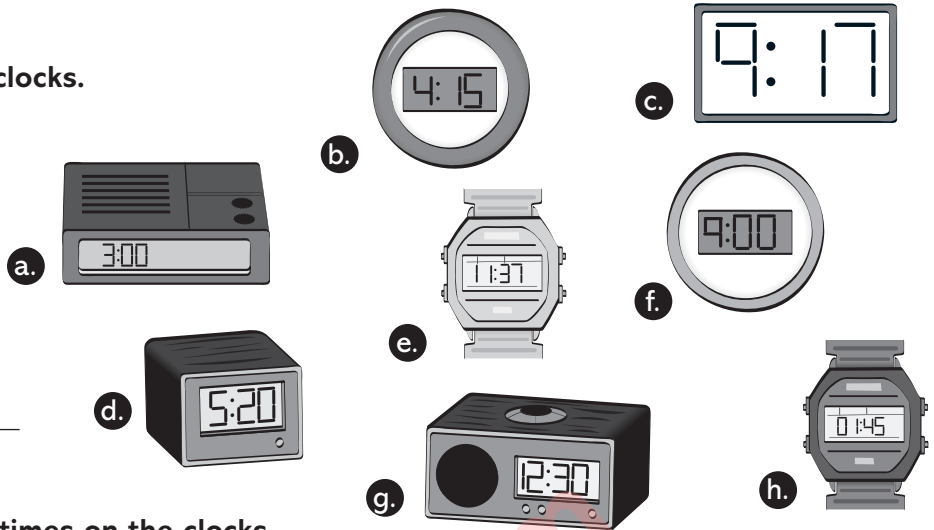


Clock times

1. Match the times with the clocks.


- It's four fifteen. b
- It's nine o'clock.
- It's five twenty.
- It's twelve thirty.
- It's three o'clock.
- It's one forty-five.
- It's eleven thirty-seven.
- It's nine seventeen.



2. What time is it? Draw the times on the clocks.




1. It's two fifteen.



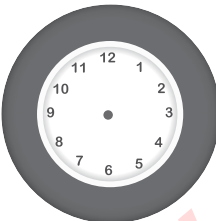
2. It's four thirty.



3. It's seven fifty.




4. It's six oh five.




5. It's eight o'clock.



6. It's ten forty-five.



7. It's twelve o'clock.




8. It's six thirty.

School subjects

3. Complete the puzzle with the school subjects.

Across ➤



Down ▼

